

DRAWING TALLY MARKS & PICTOGRAPH

Name _____


Score _____

PGS:21

Use the data given below to draw Tally marks and Pictograph.

10, 11, 13, 14, 15, 10, 11, 13, 14, 14, 13, 12, 12, 10, 15, 13, 11, 13, 15,
10, 11, 11, 14, 13, 14, 11, 15, 11, 11, 14, 11, 14, 12, 15, 14, 11, 15

10	
11	
13	
14	
15	

 = 2 key

10	
11	
13	
14	
15	

DRAWING TALLY MARKS & PICTOGRAPH

Name _____

Score _____


Answer key





PGS:21

Use the data given below to draw Tally marks and Pictograph.

10, 11, 13, 14, 15, 10, 11, 13, 14, 14, 13, 12, 12, 10, 15, 13, 11, 13, 15,
10, 11, 11, 14, 13, 14, 11, 15, 11, 11, 14, 11, 14, 12, 15, 14, 11, 15

10	
11	
13	
14	
15	

 = 2 key

10	
11	
13	
14	
15	