



Name _____

Score _____

DRAWING PICTOGRAPH

PGS:16

Christopher prepares and sells tomato sauce to the small restaurants around his locality. The number of bottles given to each restaurant for the month of January is given below. Draw pictograph and answer the following.

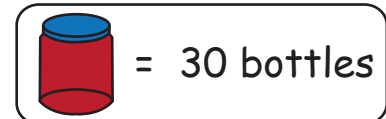
A Restaurant - 150

B Restaurant - 210

C Restaurant - 120

D Restaurant - 300

E Restaurant - 270



= 30 bottles

A Restaurant	
B Restaurant	
C Restaurant	
D Restaurant	
E Restaurant	

- 1) Compare the bottles of sauce given to A restaurant and D restaurant?
- 2) To which restaurant more bottles were given than B but less than D?
- 3) How many bottles of sauce were delivered to all 5 restaurants?
- 4) Which restaurant received the maximum sauce bottles and which received the minimum?
- 5) B received 90 more bottles than C. True or false?



Name _____

Score _____

DRAWING PICTOGRAPH

Answer key

PGS:16

Christopher prepares and sells tomato sauce to the small restaurants around his locality. The number of bottles given to each restaurant for the month of January is given below. Draw pictograph and answer the following.

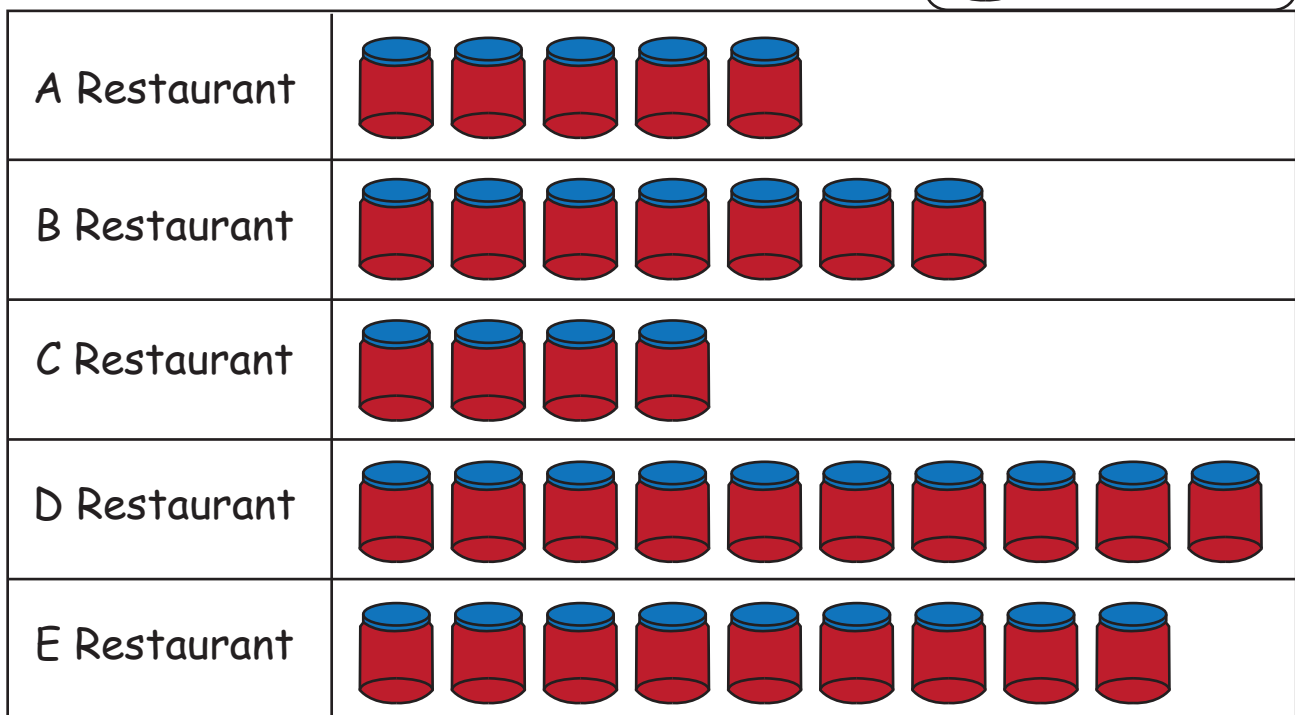
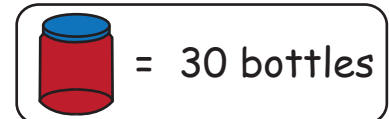
A Restaurant - 150

B Restaurant - 210

C Restaurant - 120

D Restaurant - 300

E Restaurant - 270



1) Compare the bottles of sauce given to A restaurant and D restaurant?

Doubles (or) $D > A$

2) To which restaurant more bottles were given than B but less than D?

E Restaurant

3) How many bottles of sauce were delivered to all 5 restaurants?

1050

4) Which restaurant received the maximum sauce bottles and which received the minimum?

**D Restaurant maximum
C Restaurant minimum**

5) B received 90 more bottles than C. True or false?

True