



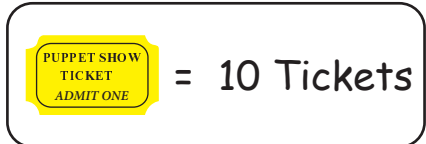
# PUPPET SHOW TICKETS PICTOGRAPH

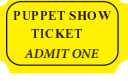
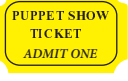
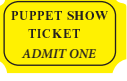
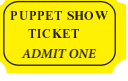
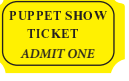
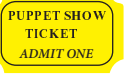
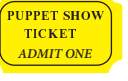











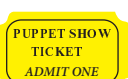
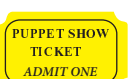
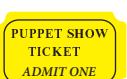
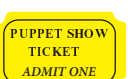
Name \_\_\_\_\_

Score \_\_\_\_\_

PGS:07

Martha organizes a Puppet show at the school carnival. The carnival is held for 5 days. The number of tickets sold are shown on a pictograph. Use the key and answer the questions that follow.



Sunday	      
Monday	    
Tuesday	  
Wednesday	  
Thursday	   

1) How many tickets were sold on Monday?

2) Which two days sold a total of 60 tickets?

3) How many more tickets were sold on Sunday than Thursday?

4) If 40 more tickets would have been sold on Wednesday, would it be equal to the Sunday's sales?

5) How many tickets were sold in all?



# PUPPET SHOW TICKETS PICTOGRAPH


Name \_\_\_\_\_

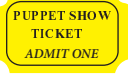
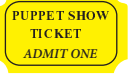
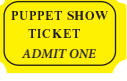
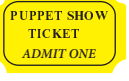
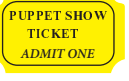
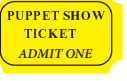
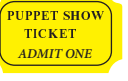











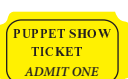
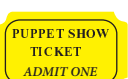
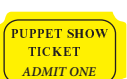
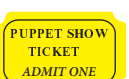
Score \_\_\_\_\_

PGS:07

## Answer key

Martha organizes a Puppet show at the school carnival. The carnival is held for 5 days. The number of tickets sold are shown on a pictograph. Use the key and answer the questions that follow.

	= 10 Tickets
---	--------------

Sunday	      
Monday	    
Tuesday	  
Wednesday	  
Thursday	   

1) How many tickets were sold on Monday?

50

2) Which two days sold a total of 60 tickets?

Tuesday  
Wednesday

3) How many more tickets were sold on Sunday than Thursday?

30

4) If 40 more tickets would have been sold on Wednesday, would it be equal to the Sunday's sales?

Yes

5) How many tickets were sold in all?

220