




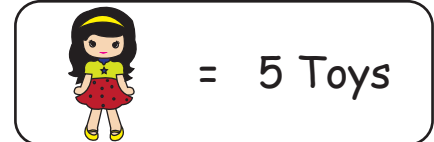
TOY SALES PICTOGRAPH

Name _____

Score _____

PGS:06

Jack owns a small toy shop. He records the sales of soft toys in his store for 5 days and represents it using a pictograph. Read the pictograph and answer the following.



- 1) Which day recorded a sales more than 10 toys but less than 25 toys?
- 2) What is the total sales of the last three days?
- 3) How many toys were sold on day 2?
- 4) How many more toys were sold on day 3 compared to day 5?
- 5) Exactly 10 toys were sold on this day. Which day?



TOY SALES PICTOGRAPH

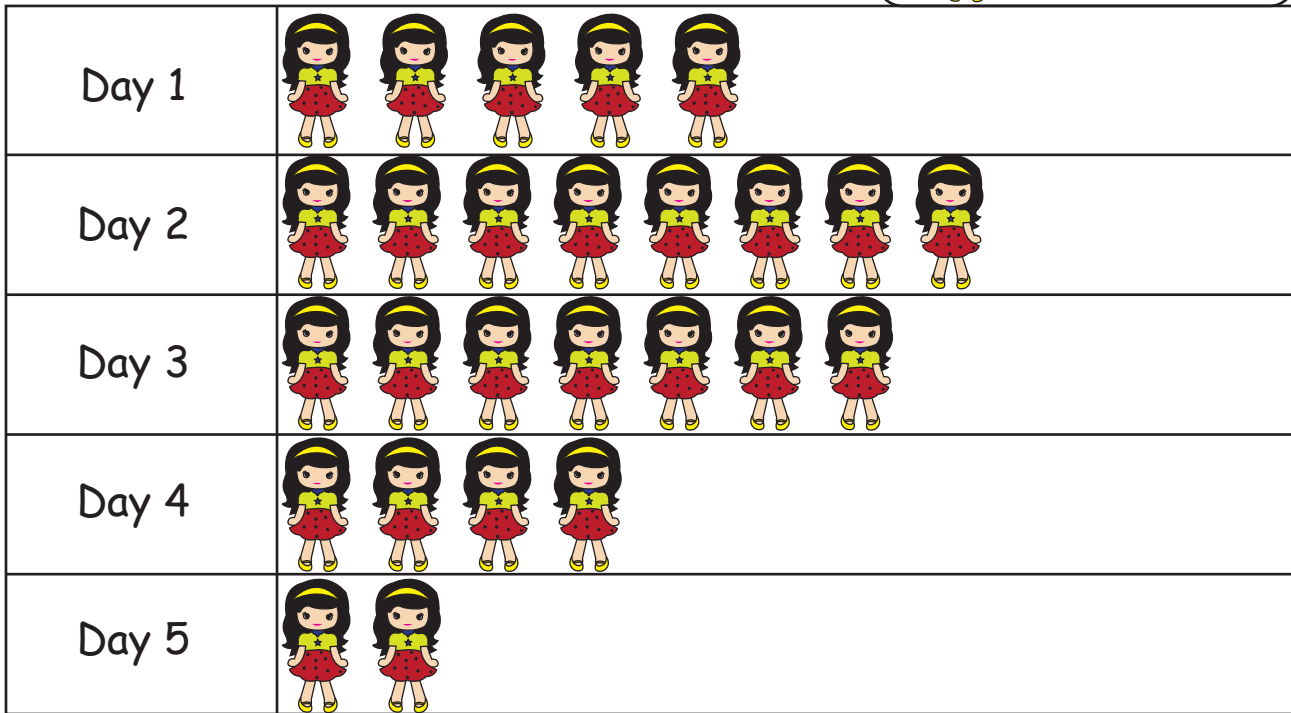
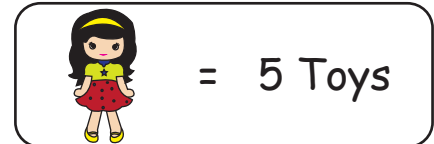
Answer key

Name _____

Score _____

PGS:06

Jack owns a small toy shop. He records the sales of soft toys in his store for 5 days and represents it using a pictograph. Read the pictograph and answer the following.



1) Which day recorded a sales more than 10 toys but less than 25 toys?

Day 4

2) What is the total sales of the last three days?

65

3) How many toys were sold on day 2?

40

4) How many more toys were sold on day 3 compared to day 5?

25

5) Exactly 10 toys were sold on this day. Which day?

Day 5