



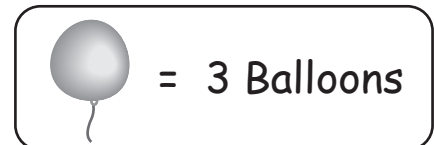
BIRTHDAY BALLOONS PICTURE GRAPH

Name _____

Score _____

PGS:04

Sam uses 5 different colored balloons to decorate his house for his daughter's birthday celebration. Follow the key below and answer the following questions.



Pink	
Blue	
Green	
Yellow	
White	

1) How many Green balloons were used?

2) Which color balloon was most used?
How many?

3) How many balloons were used in all to decorate the house?

4) How many more White balloons were used than Yellow?

5) Were the same number of Pink and Yellow balloons used?



BIRTHDAY BALLOONS PICTURE GRAPH

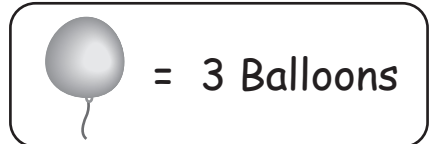
Name _____




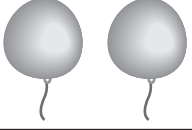
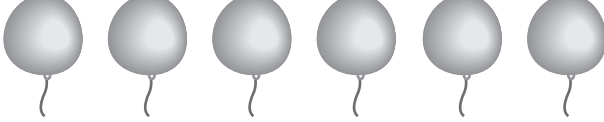
Score _____

PGS:04

Answer key

Sam uses 5 different colored balloons to decorate his house for his daughter's birthday celebration. Follow the key below and answer the following questions.



Pink	
Blue	
Green	
Yellow	
White	

1) How many Green balloons were used?

15

2) Which color balloon was most used?
How many?

Blue, 24

3) How many balloons were used in all to decorate the house?

75

4) How many more White balloons were used than Yellow?

12

5) Were the same number of Pink and Yellow balloons used?

No