




Division Groups

Name _____

Score _____

DS:II:13

1) Divide the squares in to groups of 3.



Number of groups 4

2) Divide the triangles in to groups of 2.



Number of groups _____

3) Divide the circles in to groups of 5.



Number of groups _____

4) Divide the pentagons in to groups of 6.



Number of groups _____

5) Divide the stars in to groups of 4.



Number of groups _____



Division Groups


Name _____

Score _____

Answer key

DS:II:13

1) Divide the squares in to groups of 3.



Number of groups 4

2) Divide the triangles in to groups of 2.



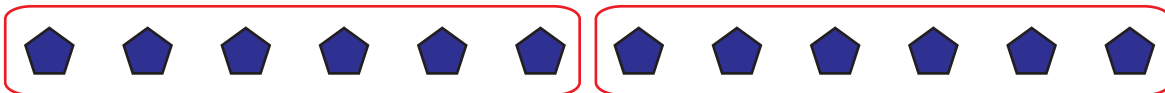
Number of groups 7

3) Divide the circles in to groups of 5.



Number of groups 3

4) Divide the pentagons in to groups of 6.



Number of groups 2

5) Divide the stars in to groups of 4.



Number of groups 5